

The University of Texas at Austin  
Dept. of Electrical and Computer Engineering  
***Final Exam***

Date: May 14, 2009

Course: EE 313 Evans

Name: \_\_\_\_\_  
Last, First

- The exam is scheduled to last 3 hours.
- Open books and open notes. You may refer to your homework assignments and the homework solution sets.
- Calculators are allowed.
- **Power off all cell phones and pagers**
- You may use any standalone computer system, i.e. one that is not connected to a network.
- All work should be performed on the quiz itself. If more space is needed, then use the backs of the pages.
- **Fully justify your answers unless instructed otherwise. If you cite a reference, then please provide a page number and the quote you are using.**

Problem	Point Value	Your score	Topic
1	10		Differential Equation Rhythm
2	10		Differential Equation Blues
3	10		Stability
4	10		Convolution in Two Domains
5	10		Sampling in Continuous Time
6	15		Discrete-Time Filter Analysis
7	15		Discrete-Time Filter Design
8	10		Sinusoidal Amplitude Modulation
9	10		Sinusoidal Amplitude Demodulation
<b>Total</b>	<b>100</b>		

**Final Exam Problem 1.** Differential Equation Rhythm. 10 points.

Consider a continuous-time system with input  $x(t)$  and output  $y(t)$  governed by the differential equation

$$\frac{d^2}{dt^2} y(t) + 7 \frac{d}{dt} y(t) + 10 y(t) = x(t)$$

for  $t \geq 0^+$ .

- (a) What are the characteristic roots of the differential equation? 2 points.
  
  
  
  
  
  
  
  
  
  
- (b) Find the zero-input response assuming non-zero initial conditions. Please leave your answer in terms of  $C_1$  and  $C_2$ . 4 points.
  
  
  
  
  
  
  
  
  
  
- (c) Find the zero-input response for the initial conditions  $y(0^+) = 0$  and  $y'(0^+) = 1$ . 4 points.

**Final Exam Problem 2.** Differential Equation Blues. 10 points.

Consider a continuous-time linear time-invariant (LTI) system with input  $x(t)$  and output  $y(t)$  governed by the differential equation

$$\frac{d^2}{dt^2} y(t) + 7 \frac{d}{dt} y(t) + 10 y(t) = x(t)$$

for  $t \geq 0^-$ .

- (a) What is the transfer function in the Laplace domain? 2 points.
  
  
  
  
  
  
  
  
  
  
- (b) What are the values of the poles and zeroes of the transfer function? 2 points.
  
  
  
  
  
  
  
  
  
  
- (c) What is the region of convergence for the transfer function? 2 points.
  
  
  
  
  
  
  
  
  
  
- (d) What is the step response of the system in the time domain? 4 points.

**Final Exam Problem 3.** Stability. 10 points.

In this problem, the input signal is denoted by  $x(t)$  and the output signal is denoted by  $y(t)$ . The input-output relationship of a system is defined as

$$\frac{d^2}{dt^2} y(t) + 4 \frac{d}{dt} y(t) + Ky(t) = x(t)$$

where  $K$  is an adjustable gain that can take any real value. By adjusting  $K$ , one can change the time response and frequency response of the system. Assume all initial conditions to be zero.

Assume that  $K$  is a constant (but of unknown value) and the system is linear and time-invariant.

- (a) What are the pole locations? Express your answer in terms of  $K$ . 3 points.
  
  
  
  
  
  
  
  
  
  
- (b) For what values of  $K$  is the system bounded-input bounded-output stable? 2 points.
  
  
  
  
  
  
  
  
  
  
- (c) Plot the pole locations in the Laplace domain as  $K$  varies. 2 points.
  
  
  
  
  
  
  
  
  
  
- (d) Describe the frequency selectivity of the system (lowpass, highpass, bandpass, bandstop, notch, or allpass) for all possible values of  $K$  for which the system is bounded-input bounded-output stable. 3 points.

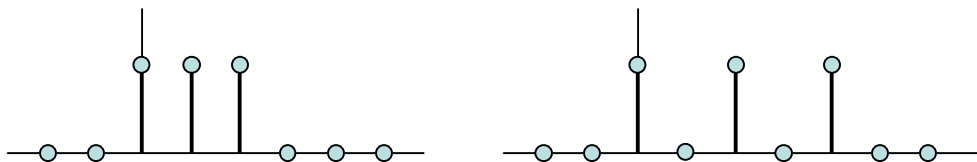
$x[n]$  $y[n]$ 

1

0 1 2 Final Exam Problem 4. Convolution in Two Dimensions. 10 points.

(a) In continuous time, convolve the unit step function  $u(t)$  and the signal  $\delta(t) - \delta(t-T)$ , where  $\delta(t)$  is the Dirac delta functional and  $T$  is a positive real number. 5 points.

(b) Consider a causal discrete-time linear time-invariant system. For input  $x[n]$  given below, the system gives output  $y[n]$  below. What is the impulse response  $h[n]$  of the system? Both  $x[n]$  and  $y[n]$  are of finite extent. 5 points.



**Final Exam Problem 5.** Sampling in Continuous Time. 10 points.

Sampling of an analog continuous-time signal  $f(t)$  can be modeled in continuous-time as

$$y(t) = f(t) p(t)$$

where  $p(t)$  is the impulse train defined by

$$p(t) = \sum_{n=-\infty}^{\infty} \delta(t - nT_s)$$

such that  $T_s$  is the sampling duration. The Fourier series expansion of the impulse train is

$$p(t) = \frac{1}{T_s} (1 + 2 \cos(\omega_s t) + 2 \cos(2 \omega_s t) + \dots)$$

where  $\omega_s = 2 \pi / T_s$ .

(a) Plot the impulse train  $p(t) = \sum_{n=-\infty}^{\infty} \delta(t - nT_s)$ . 2 points.

(b) Find  $P(\omega)$ , the Fourier transform of  $p(t)$ . 2 points.

(c) Express your answer for  $P(\omega)$  in part (b) as an impulse train in the Fourier domain. 3 points.

(d) What is the spacing of the impulse train  $P(\omega)$  with respect to  $\omega$ ? 3 points.

**Final Exam Problem 6. Discrete-Time Filter Analysis.** 15 points.

A causal discrete-time linear time-invariant filter with input  $x[n]$  and output  $y[n]$  is governed by the following difference equation:

$$y[n] = -0.8 y[n-1] + x[n] + 1.25 x[n-1]$$

- (a) Draw the block diagram for this filter. 3 points.
- (b) What are the initial conditions? What values should they be assigned? 3 points.
- (c) Find the equation for the transfer function in the  $z$ -domain including the region of convergence. 3 points.
- (d) Find the equation for the frequency response of the filter. 3 points.
- (e) Describe the frequency selectivity of this filter as lowpass, bandpass, bandstop, highpass, notch, or allpass. Why? 3 points.

$\text{Im}(z)$

**Final Exam Problem 7. Discrete-Time Filter Design.** 15 points.

$\text{Re}(z)$

Digital Subscriber Line (DSL) systems transmit voice and data over a telephone line using frequencies from 0 Hz to 1.1 MHz. DSL systems use a sampling rate of 2.2 MHz.

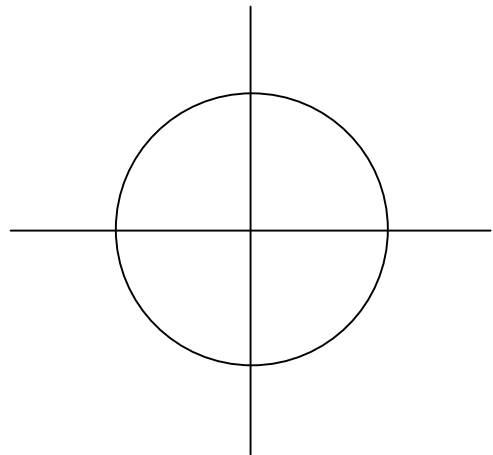
Consider an AM radio station that has a carrier frequency of 550 kHz, has a transmission bandwidth of 10 kHz, and is interfering with DSL transmission.

Design a discrete-time filter *biquad* for the DSL receiver to reject the AM radio station but pass as much of the DSL transmission band as possible. A biquad has 2 poles and 0, 1, or 2 zeros.

(a) Is the frequency selectivity of the discrete-time IIR filter biquad lowpass, bandpass, bandstop, highpass, notch, or allpass? Why? 3 points.

(b) Give formulas for the locations of the poles and zeros of the biquad. 5 points.

(c) Draw the poles and zeros on the pole-zero diagram on the right. The circle has a radius of one. 4 points.



(d) Compute the scaling constant (gain) for the filter's transfer function. 3 points.



**Final Exam Problem 8.** Sinusoidal Amplitude Modulation. 10 points.

In practice, we cannot generate a two-sided sinusoid  $\cos(2 \pi f_c t)$ , but we can generate a one-sided sinusoid  $\cos(2 \pi f_c t) u(t)$ .

Consider a one-sided cosine  $c(t) = \cos(2 \pi f_c t) u(t)$  where  $f_c$  is the carrier frequency (in Hz).

(a) By using the Fourier transforms of  $\cos(2 \pi f_c t)$  and  $u(t)$  from a lookup table, compute the Fourier transform of  $c(t) = \cos(2 \pi f_c t) u(t)$  using Fourier transform properties. 3 points.

(b) Draw  $|C(\omega)|$ , the magnitude of the Fourier transform of  $c(t)$ . 3 points.

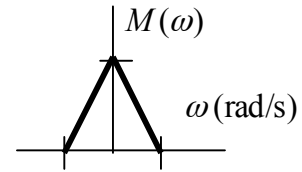
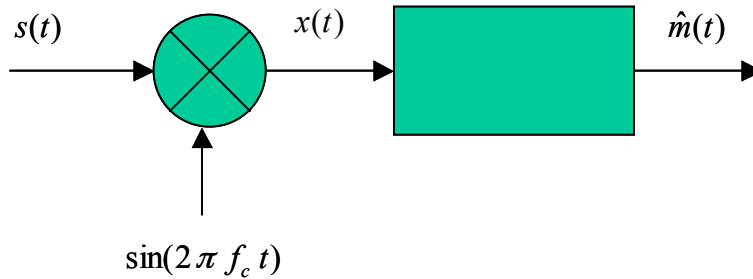
(c) Describe the differences between the magnitude of the Fourier transforms of a one-sided cosine and a two-sided cosine. What is the bandwidth of each signal? 4 points.

**Final Exam Problem 9.** Sinusoidal Amplitude Demodulation.  $\omega_m$  10 points.

A lowpass, real-valued message signal  $m(t)$  with bandwidth  $f_m$  (in Hz) is to be transmitted using sinusoidal amplitude modulation

$$s(t) = m(t) \sin(2 \pi f_c t)$$

where  $f_c$  is the carrier frequency (in Hz) and  $f_c \gg f_m$ . The receiver processes the transmitted signal  $s(t)$  to obtain an estimate of the message signal,  $\hat{m}(t)$ , as follows:



Hence,  $x(t) = s(t) \sin(2 \pi f_c t)$ .  $M(\omega)$  is plotted above to the upper right.

(a) Plot the Fourier transform of  $s(t)$ , i.e.  $S(\omega)$ . 4 points.

(b) Plot the Fourier transform of  $x(t)$ , i.e.  $X(\omega)$ . 4 points.

(c) Give the maximum passband frequency and the minimum stopband frequency for the lowpass filter to recover  $m(t)$ . 2 points.